


Siapiau Rhif Lluosi Tablau Rhif 3


Gallaf ysgrifennu datganiadau lluosu gan ddefnyddio'r arwyddion lluosu a hafal. Ar gyfer pob delwedd, ysgrifennwch y brawddegau rhif a ddangosir. Er enghraifft:



$$\boxed{3} \times \boxed{3} = \boxed{9}$$



$$\boxed{} \times \boxed{} = \boxed{}$$



$$\boxed{} \times \boxed{} = \boxed{}$$



$$\boxed{} \times \boxed{} = \boxed{}$$



$$\boxed{} \times \boxed{} = \boxed{}$$



$$\boxed{} \times \boxed{} = \boxed{}$$



$$\boxed{} \times \boxed{} = \boxed{}$$



$$\boxed{} \times \boxed{} = \boxed{}$$

Cofia roi yr arwyddion 'x' a '=' yn y llefydd cywir

Siapiau Rhif Lluosi Tablau Rhif 5


Gallaf ysgrifennu datganiadau llusosi gan ddefnyddio'r arwyddion llusosi a hafal. Ar gyfer pob delwedd, ysgrifennwch y brawddegau rhif a ddangosir. Er enghraifft:




$$5 \times 2 = 10$$




$$\square \times \square = \square$$




$$\square \times \square = \square$$



$$\square \times \square = \square$$



$$\square \times \square = \square$$



$$\square \times \square = \square$$



$$\square \times \square = \square$$




Cofia roi yr arwyddion 'x' a '=' yn y llefydd cywir


$$\square \times \square = \square$$

Siapiau Rhif Lluosi Tablau Rhif 10


Gallaf ysgrifennu datganiadau lluosu gan ddefnyddio'r arwyddion lluosu a hafal. Ar gyfer pob delwedd, ysgrifennwch y brawddegau rhif a ddangosir. Er enghraifft:




$$10 \times 2 = 20$$




$$\square \times \square = \square$$




$$\square \times \square = \square$$





$$\square \times \square = \square$$



$$\square \times \square = \square$$



$$\square \times \square = \square$$



Cofia roi yr arwyddion 'x' a '=' yn y llefydd cywir

$$\square \times \square = \square$$

$$\square \times \square = \square$$